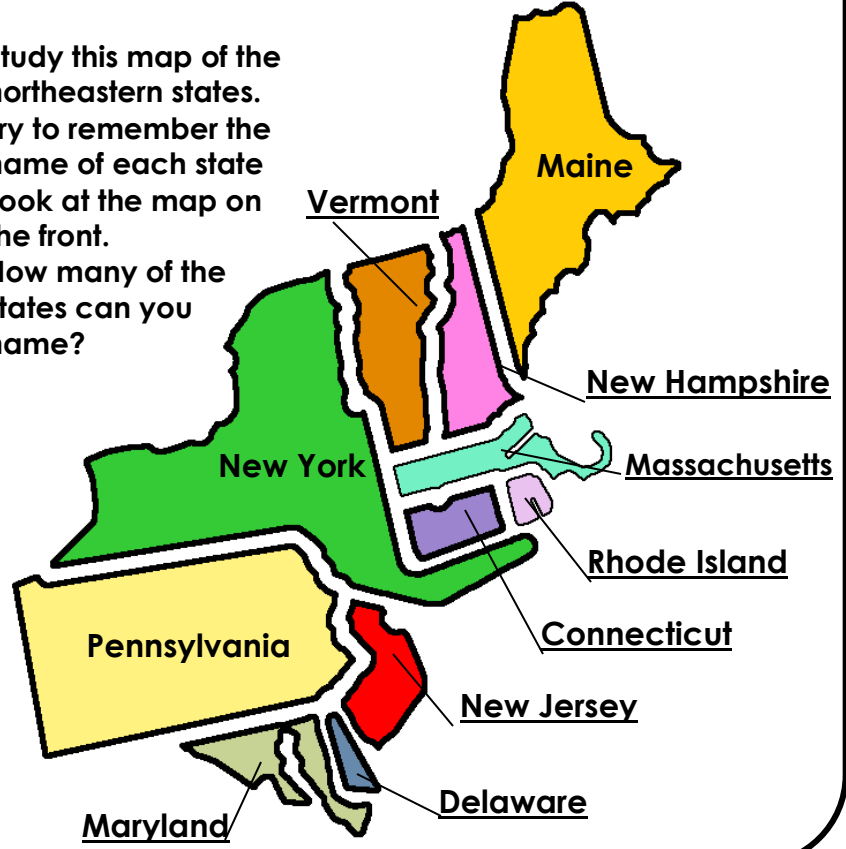


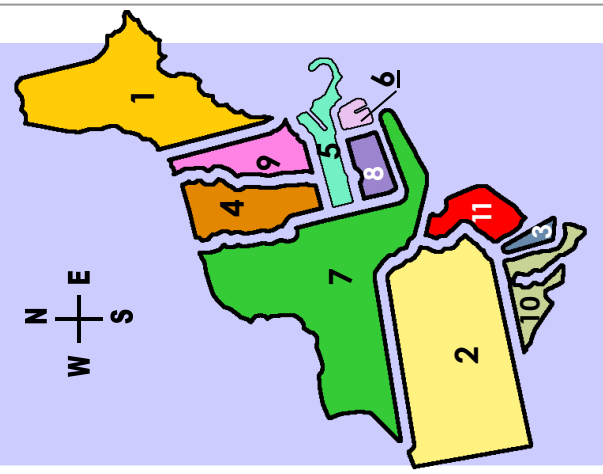
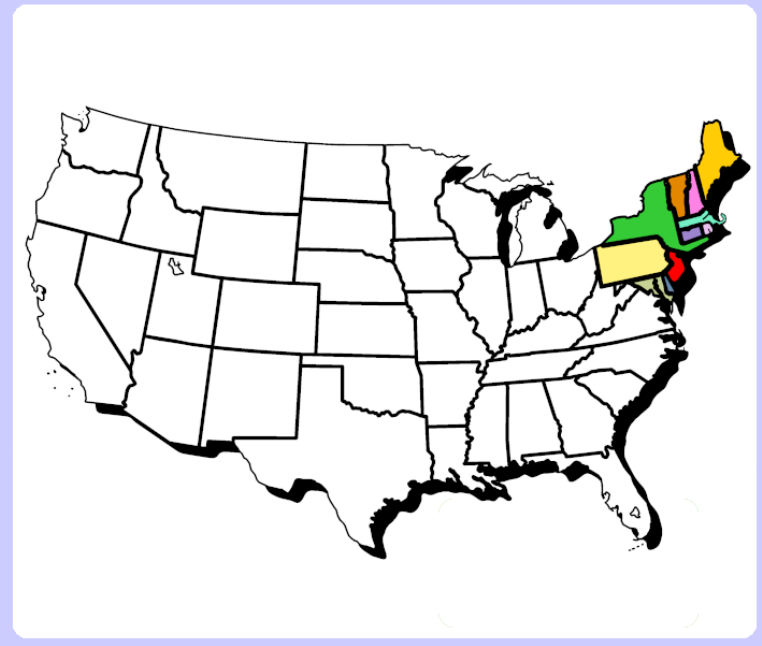
STUDY THE STATE NAMES

- Study this map of the northeastern states.
- Try to remember the name of each state
- Look at the map on the front.
- How many of the states can you name?



©2021 ZING-ZOOM.COM

NORTHEASTERN STATES

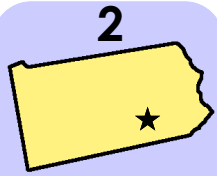


- To play:
1. Study the map on the back of this folder.
 2. Stack the state cards and place them in the folder pocket.
 3. Look at the shape of the state. Find it on the map. What is the name of the state?
 4. Pull up the card to check your answer.
 5. Once you know the names of the states, try to learn the name of each state's capital.



Maine

***Augusta**



Pennsylvania

***Harrisburg**



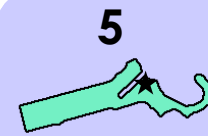
Delaware

***Dover**



Vermont

***Montpelier**



Massachusetts

***Boston**



**Rhode
Island**

***Providence**



New York

***Albany**



Connecticut

***Hartford**



**New
Hampshire**

***Concord**



Maryland

***Annapolis**



New Jersey

***Trenton**