

# STUDY THE STATE NAMES



Study this map of the western states.  
Try to remember the name of each state.

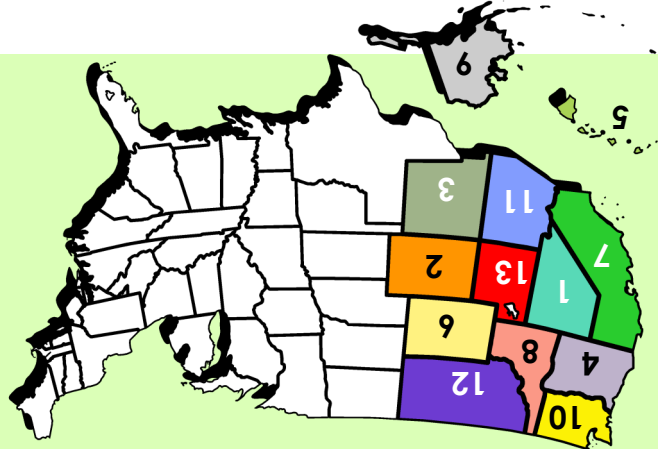
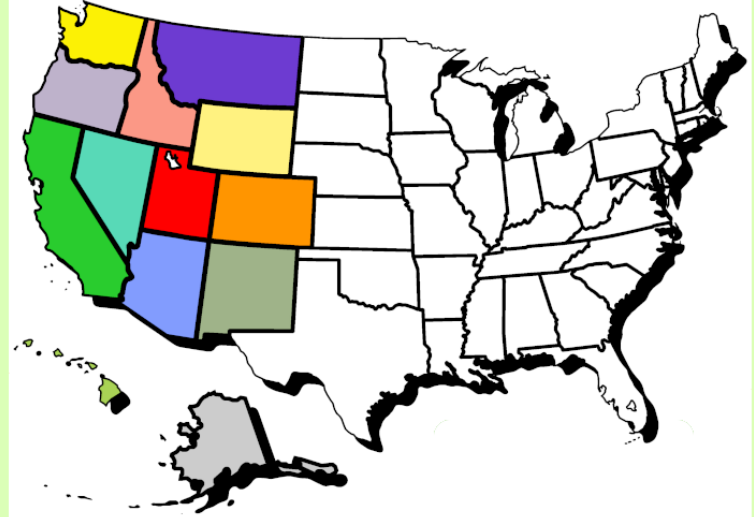


Look at the map on the front.  
How many of these states can you name?

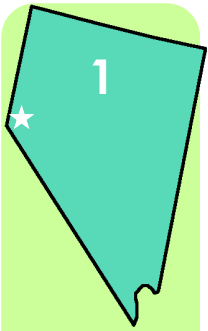
©2021 ZING-ZOOM.COM

## Mapping 3 - Western States and Capitals

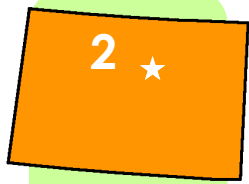
# WESTERN STATES




- To play:
1. Study the map on the back of this folder.
  2. Stack the state cards and place them in the folder pocket.
  3. Look at the state shape. Find the number on the map. What is the name of the state?
  4. Pull up the card to check your answer.
  5. Once you know the names of the states, try to learn the name of each state's capital.



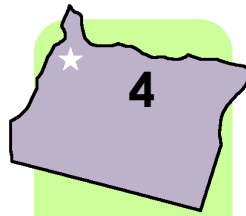
**Nevada**  
\*Carson City



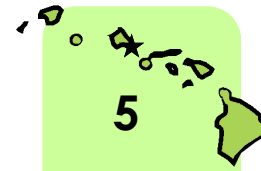
**Colorado**  
\*Denver



**New Mexico**  
\*Santa Fe



**Oregon**  
\*Salem



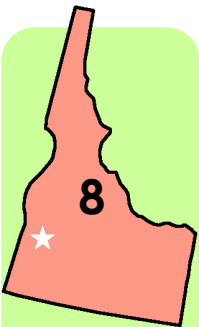
**Hawaii**  
\*Honolulu



**Wyoming**  
\*Cheyenne



**Utah**  
\*Salt Lake City



**Idaho**  
\*Boise



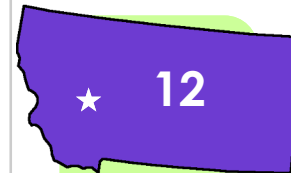
**Alaska**  
\*Juneau



**Washington**  
\*Olympia



**Arizona**  
\*Phoenix



**Montana**  
\*Helena



**California**  
\*Sacramento